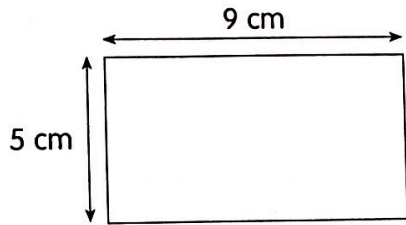


Worksheet 2 Rectangles

1. Find the perimeter and area of each of the following rectangles.

(a)



$$P = 2(l + b)$$

$$P = 2(9 + 5)$$

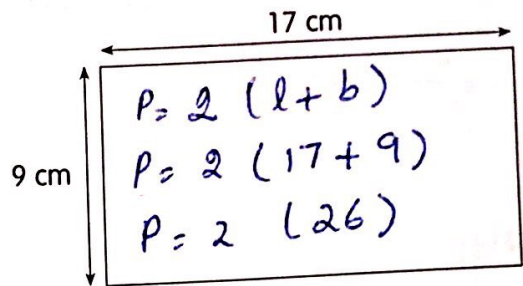
$$= 2 \times 14$$

Perimeter = cm

Area = ×

= cm²

(b)

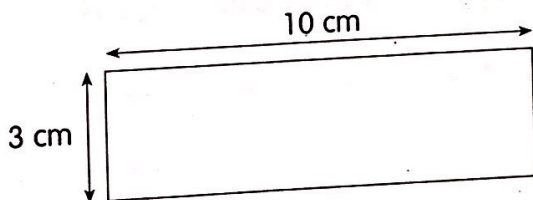


Perimeter = cm

Area = ×

= cm²

(c)



$$P = 2(l + b)$$

$$P = 2(10 + 3)$$

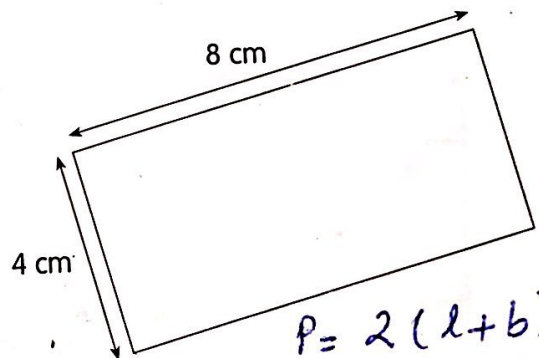
$$P = 2(13)$$

Perimeter = cm

Area = ×

= cm²

(d)



$$P = 2(l + b)$$

$$P = 2(8 + 4)$$

$$= 2(12)$$

Perimeter = cm

Area = ×

= cm²