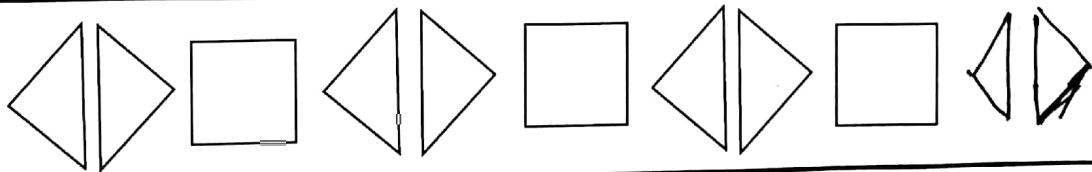
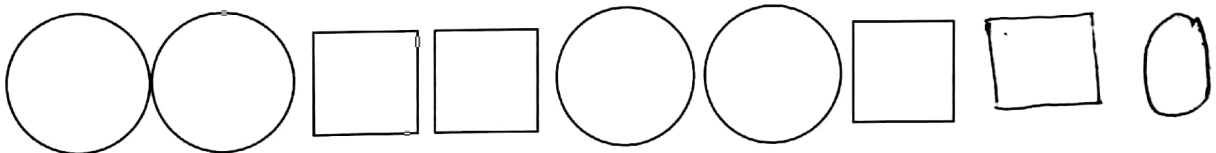
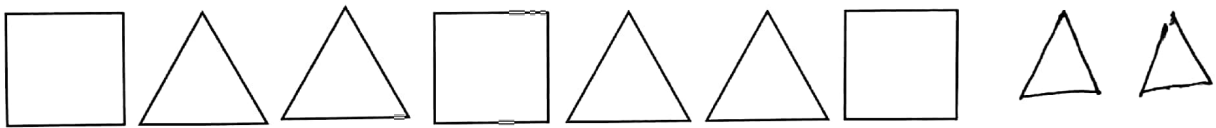
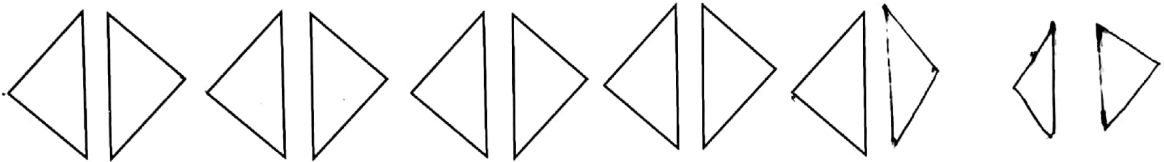
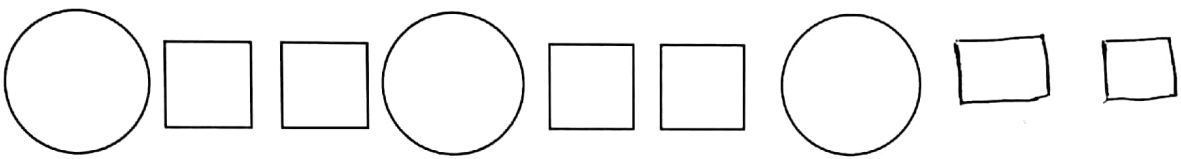



Revision No: 1

Complete the pattern:

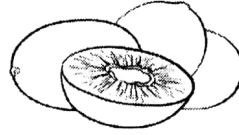


Revision No - 2

B. Look at figure and answer the questions.



Oranges - 3 kg



Kiwi- 2kg



Pears – 5kg

1. Which of the fruits is the heaviest ? Pears.
2. How many kilograms is the Pears heavier then the oranges?

| | |
|----------------|-------------|
| Pears | 5 kg |
| <u>Oranges</u> | <u>3 kg</u> |

Pears is 2 Kg heavier than oranges.

3. Which of the fruit is the lightest ? Kiwi


4. What is the total weight of the pears , oranges and kiwi?

| | |
|---------|-------------|
| Pears | 5 kg |
| Oranges | 3 kg |
| + Kiwi | <u>2 kg</u> |
| | 10Kg |



Revision No - 3

I. Circle the picture that is lighter in mass.

1.



2.



3.



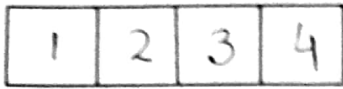
4.



Revision No -4

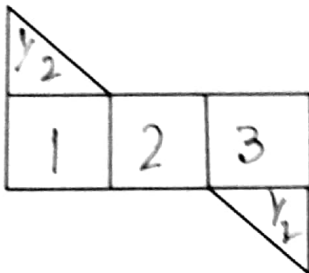
J. Write the total number square units of the figure.

1.



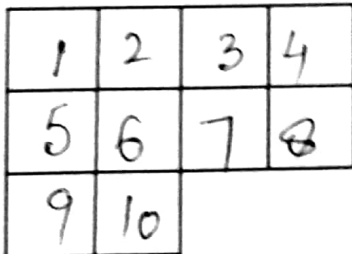
Ans. 4 square units.

2.



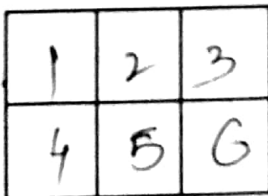
Ans. 4 square units.

3.



Ans. 10 square units.

4...



6 square units.