


**Worksheet 1 Measuring mass in kilograms**


1. Fill in the boxes.

(a)

The mass of the pumpkin is kg.




(b)

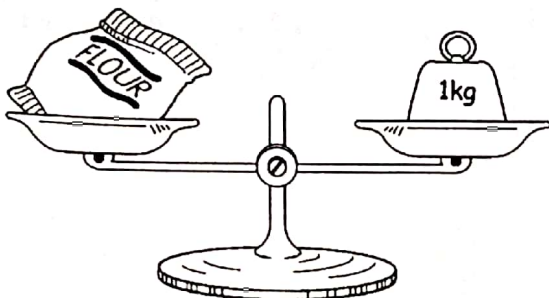


The mass of the chicken is kg.

(c) The mass of the packet of breakfast cereal is kg.




(d)




The mass of the packet of flour is kg.

(e) The mass of the 3 apples is

$\frac{1}{2}$ kg.



(f)

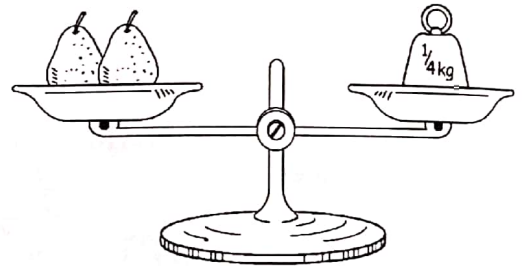


The mass of the 3 oranges is

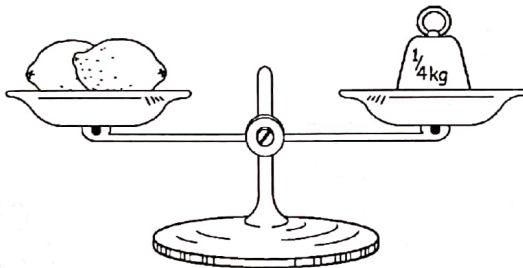
$\frac{1}{2}$ kg.

(g) The mass of the 2 pears is

$\frac{1}{4}$ kg.



(h)

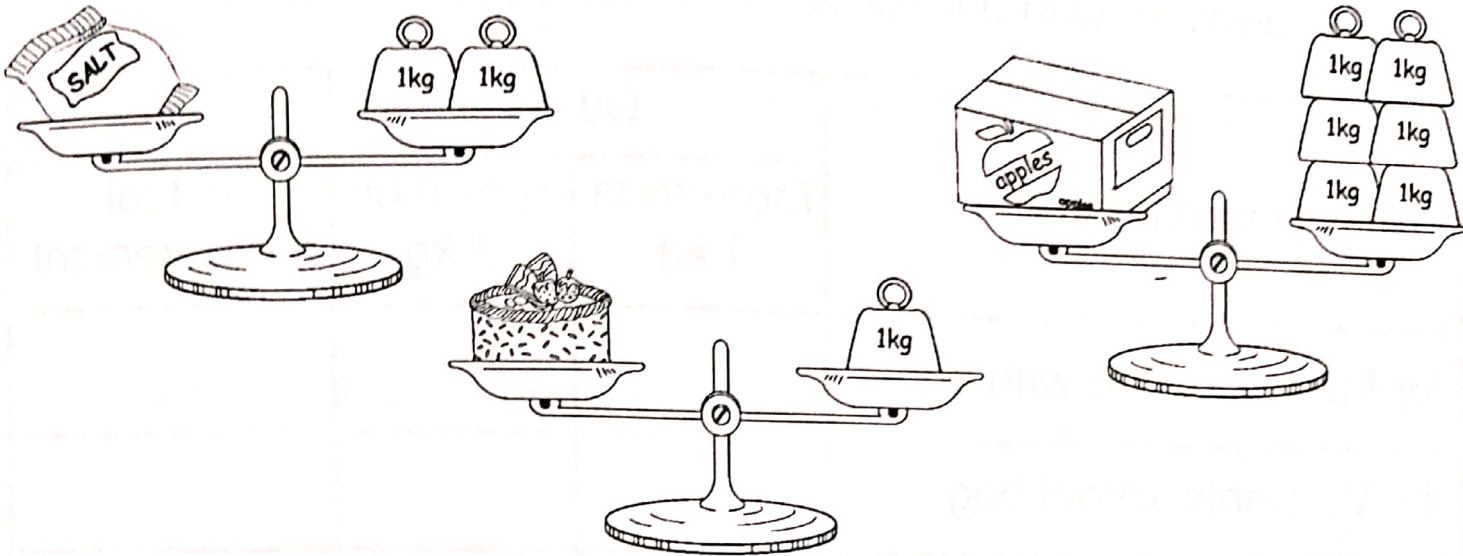


The mass of the 2 lemons is

$\frac{1}{4}$ kg.



1. Fill in the boxes.



- (a) The mass of the box of apples is kg.
- (b) The mass of the packet of salt is kg.
- (c) The mass of the cake is kg.
- (d) The cake is kg lighter than the box of apples.
- (e) The cake is kg lighter than packet of salt.
- (f) The is the lightest.
- (g) The is the heaviest.