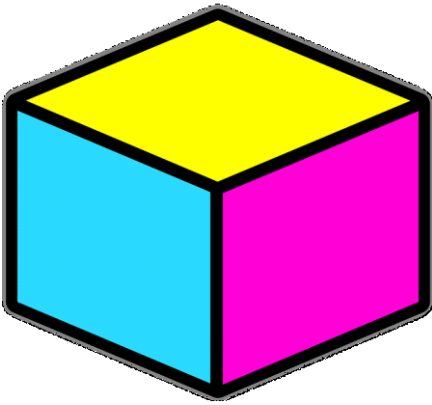



UNIT-10 Geometry

Identify and naming some solids:

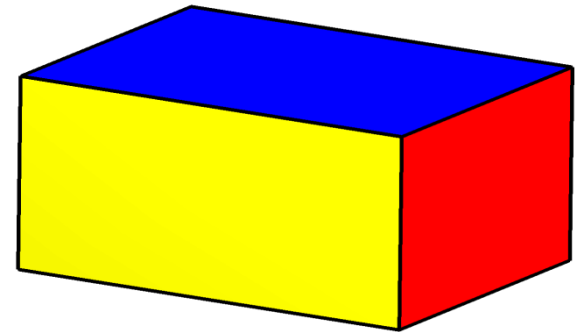
(cube, cone, sphere, cylinder, cuboid and triangular prism)



CUBE



CYLINDER

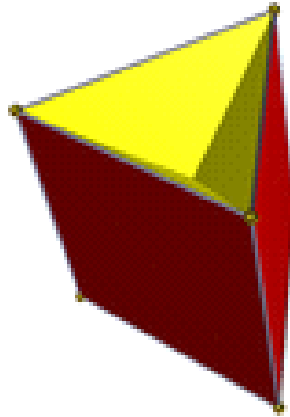


CUBOID

WORKBOOK P.NO.68 CONTINUE.....



SPHERE



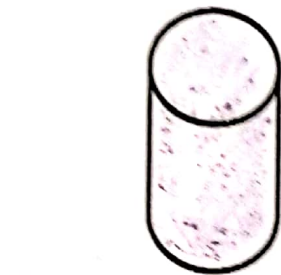
**TRIANGULAR
PRISM**



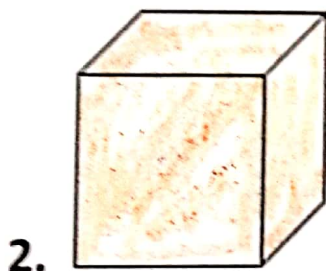
CONE

B. Recognizing shapes found in solids. Date _____
Write the shapes found in solids. (Color the shapes)

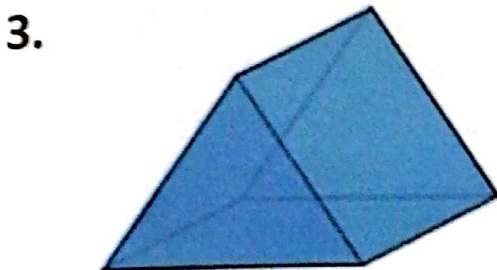
Rectangle	Circle	Square	Triangle
-----------	--------	--------	----------



Circle




Square




Triangle

4.



Circle

5.

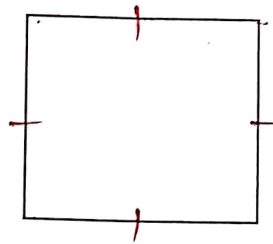


Rectangle.


A. Plane shapes .Date _____

Look at the plane shapes and fill in the correct answer.

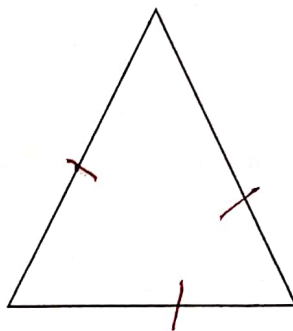
2. A square has 4 equal sides and 4 corners.



3. A rectangle has 4 sides and 4 corners.



4. A triangle has 3 sides and 3 corners.



72

D. Identifying shapes in patterns.

Date _____

Patterns Worksheet

Complete the patterns

Look at each of the patterns below and then use the space to the right to complete the pattern.

