

UNIT- 14 Area

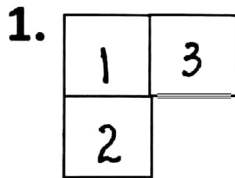
A. Area in square units Date _____

We measure area in square units.

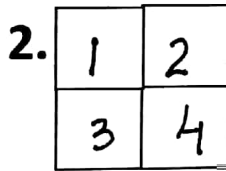
Each  is equal to 1 square unit.

Each  is equal to $\frac{1}{2}$ square unit.

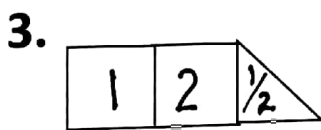
A. Write the total number of square units of the figure.



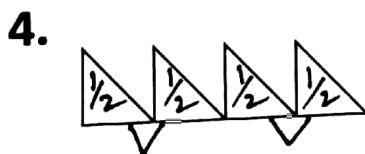
Ans: 3 square units



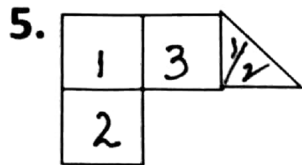
Ans: 4 square units



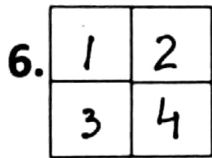
Ans $2\frac{1}{2}$ square units



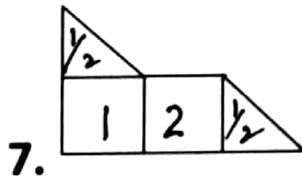
Ans 2 square units



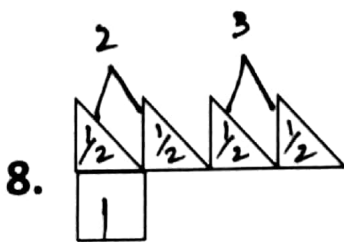
Ans: $3\frac{1}{2}$ square units



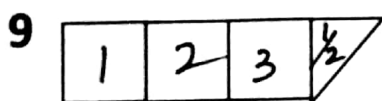
Ans: 4 square units



Ans 3 square units



Ans 3 square units

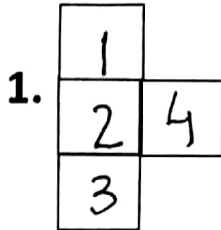


Ans $3\frac{1}{2}$ square units

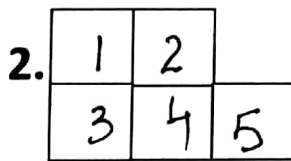


Homework.

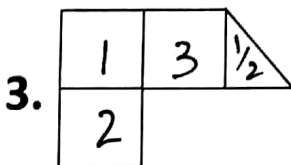
B .Write the total number of square units of the figure.



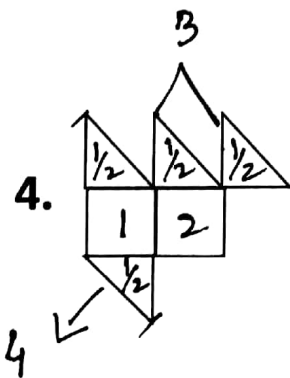
Ans: 4 square units



Ans: 5 square units



Ans $3\frac{1}{2}$ square units



Ans 4 square units