



AI - MOATTASEM INTERNATIONAL SCHOOL  
FINAL TERM REVISION

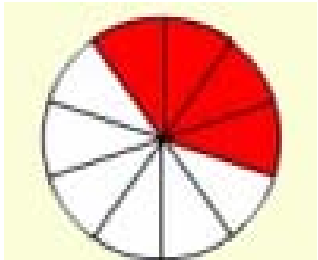
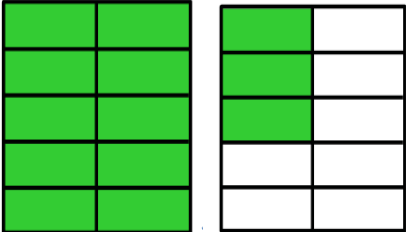
MATHEMATICS - LEVEL 3

Revision Worksheet # 3 UNSOLVED

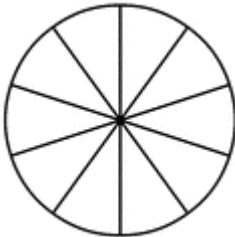

Chapter:7

“Decimals”

1. Express the shaded parts as fractions and decimals.

|   |  |
|---|--|
| <p>a.</p>  | <p>b.</p>  |
| <p>As a fraction:</p>   | <p>As a fraction:</p>  |
| <p>As a decimal:</p>  | <p>As a decimal:</p>   |

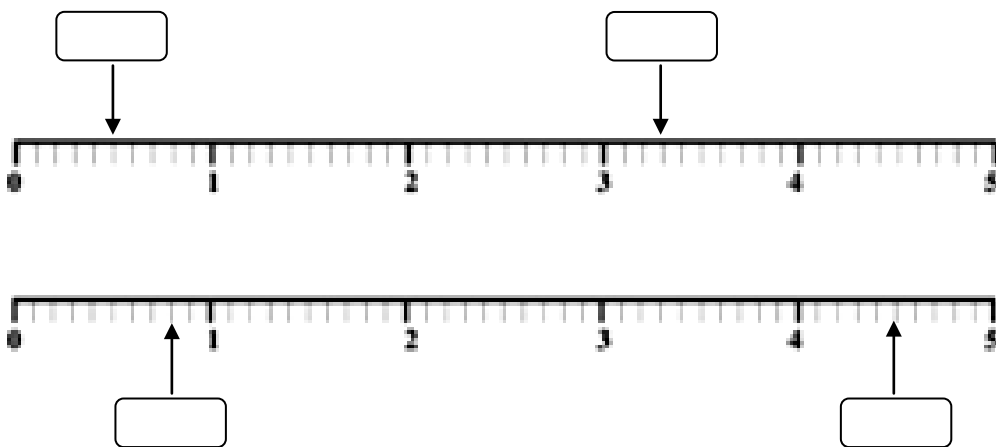
2. Shade the required parts in each of the following diagrams which represent the given decimals.

|   |  |
|---|--|
| <p>a.</p>  | <p>b.</p>  |
| <p>0.3</p>  | <p>1.7</p>   |

**3. Write as decimals.**

|                    |  |
|--------------------|--|
| a. 2 tenth         |  |
| b. 64 tenth        |  |
| c. 111 tenth       |  |
| d. $\frac{6}{10}$  |  |
| e. $4\frac{8}{10}$ |  |

**4. Write the correct decimal in the boxes provided.**



**5. Fill in the blanks:**

- 1.6 is \_\_\_\_\_ when rounded off to the nearest whole number.
- 5.3 kg is \_\_\_\_\_ kg when rounded off to the nearest kg.
- \$ 9.48 is \$ \_\_\_\_\_ when rounded off to the nearest dollar.