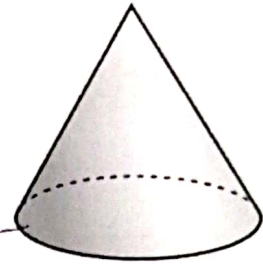


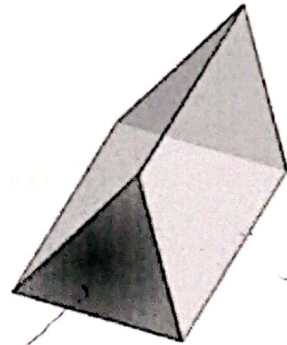
Revision No : 9

Q. Match the followings:-


1.Sphere




2.Cone



3.Cube



4.Triangular
Prism




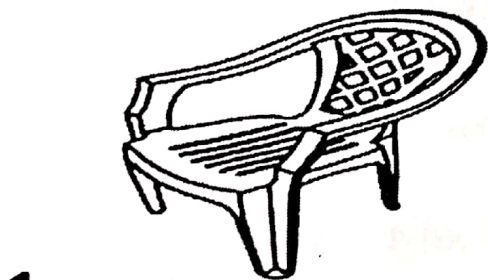



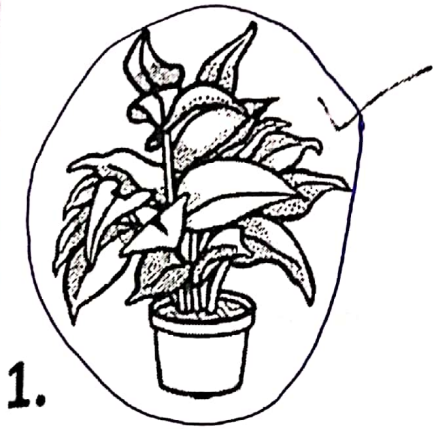
Revision No : 10

II. Look the number in each and circle the correct word Odd or Even.

| | |
|-----------------------|-----------------------|
| 5 Even <u>Odd</u> | 3 Even <u>Odd</u> |
| 2 <u>Even</u> Odd | 6 <u>Even</u> Odd |
| 10 <u>Even</u> Odd | 7 Even <u>Odd</u> |
| 15 Even <u>Odd</u> | 8 <u>Even</u> Odd |
| 17 Even <u>Odd</u> | 11 Even <u>Odd</u> |

Revision No -11

k. Circle the picture that is heavier in mass.



Revision No - 12

I. DIVISION - Sharing objects equally.

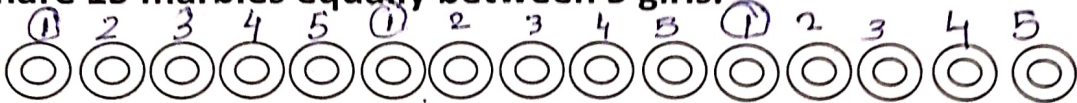
(a) Share 9 balls equally between 3 boys.



$$9 \div 3 = 3$$

Each boy gets 3 balls.

(b) Share 15 marbles equally between 5 girls.



$$15 \div 5 = 3$$

Each girl gets 3 marbles.


(c) Share 8 candies equally between 4 children.



$$8 \div 4 = 2$$

Each child gets 2 candies.

(d) Share 10 ice creams equally between 2 boys.



$$10 \div 2 = 5$$

Each boy gets 5 ice creams.